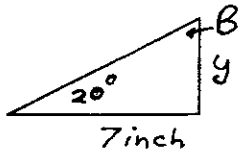
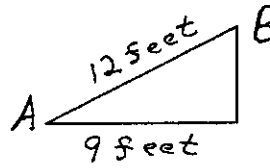


Solve for the indicated unknown values



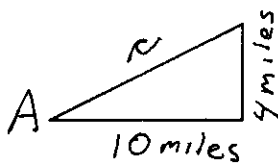
Angle B = _____

side y = _____



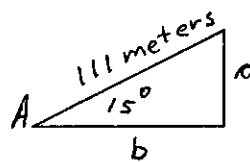
Angle A = _____

Angle B = _____



Angle A = _____

side c = _____



Side a = _____

Side b = _____